

Name: _____ Date: _____ Roll No: _____ sec: _____

Chapter 4: Our Houses

Chapter 8: Parts of a plant

Chapter 9: The Human Body

I. Choose the correct option:

1. Which of these is a sense organ?
a. eye b.ear c.tongue d.all of these []
2. Water travels to all parts of the plants from the _____.
a. roots b.stems c.leaves d.Fruits []
3. Flies are attracted to _____.
a. Clean air b.clean water c.sunlight d.garbage []
4. Which of these plants has a weak stem
a. banyan b.mango c.money plants d.banana []
5. Which of these controls all the systems in the body?
a.heart b.kidney c.brain d.lungs []

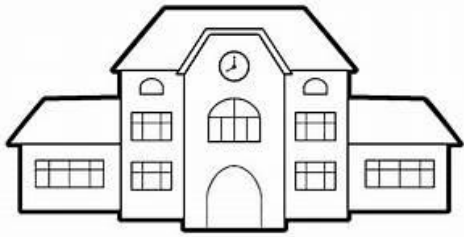
II. Fill in the blanks:

1. The _____ keeps your blood cleans by throwing out urine.
2. _____ plants stores its food in stems
3. Sunlight kills _____ that make us sick.
4. We use wire netting on windows to stop _____ from entering the house.
5. The _____ pumps blood to all parts of the body.

III. State true or false:

1. A house should be kept clean both on the inside and outside. []
2. The food that cannot be digested goes to the large intestine. []
3. All fruits have only one seed. []
4. Garbage should be thrown into open places. []
5. The muscles pull the bones to make them move. []

III. List the materials that are used to build these houses:





IV. Match the pictures of the organs with their names:

1. Tap roots

[]

a)



2. Heart

[]

b)



3. Stomata

[]

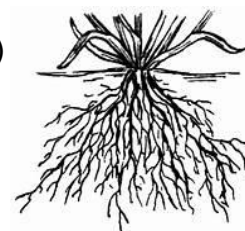
c)



4. Brain

[]

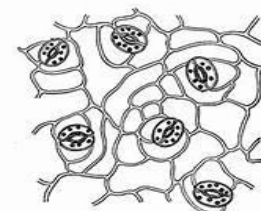
d)



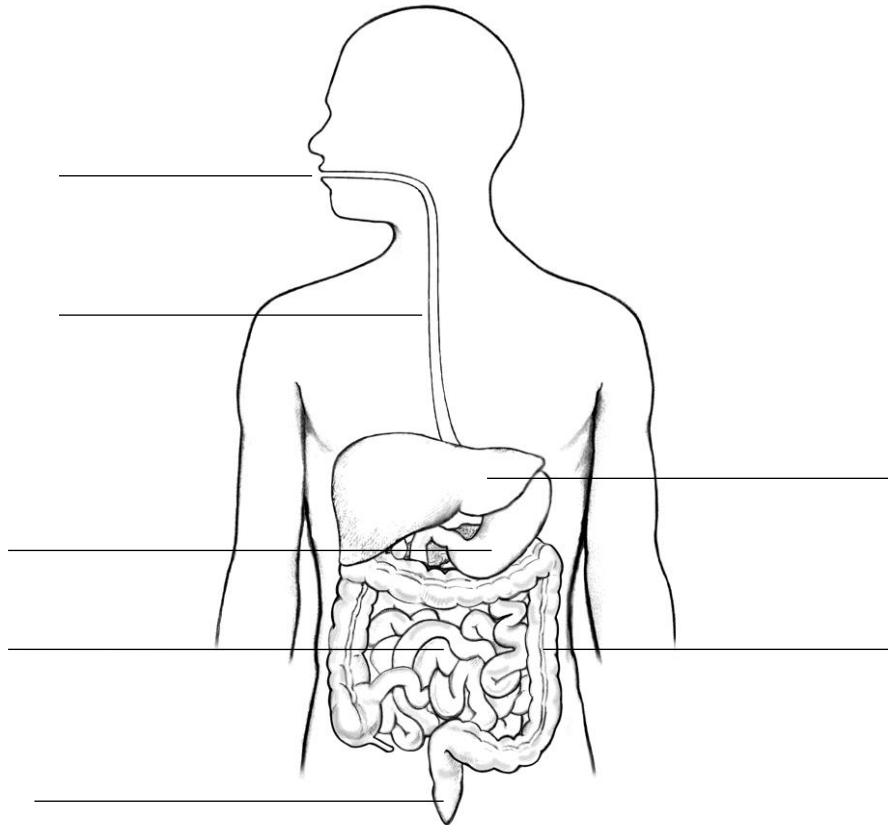
5. Fibrous root

[]

e)



V. Label the parts of digestive system given below:



VI. Name them:

1. Plants that need support to climb

2. Tiny opening found on the lower side of leaves

3. The part of a plant changed from a flower and having seeds inside it

4. The substance that gives green colour to the leaves.

5. The hard and strong stem of a big tree
